

Mathematics
Primary 2
Term 2 Combined Topical Test

Name: _____ () Marks: / 40

Class: Primary 2 () Parent's Signature: _____

Date: 4 May 2016

Duration: 45 minutes

Section A

Questions 1 to 10 carry 1 mark each.

For each question, four options are given.

One of them is the correct answer.

Choose the correct answer and write its number (1, 2, 3 or 4) in the brackets () provided. (Total: 10 marks)

1. Which one of the following has the same value as 18?

(1) 3×3

(2) 4×3

(3) 5×3

(4) 6×3

()

2. What is the missing number in the box?

$$28 = \boxed{?} \times 4$$

(1) 5

(2) 6

(3) 7

(4) 8

()

3. What is the value of $24 \div 3$?

(1) 6

(2) 7

(3) 8

(4) 9

()

4. Look at the picture below.



Which **division** equation represents the picture shown below correctly?

- (1) $12 \div 3 = 4$ (2) $16 \div 4 = 4$
(3) $20 \div 5 = 4$ (4) $20 \div 4 = 5$ ()
5. The length of a canteen table is about _____ long.


- (1) 2 cm (2) 2 m
(3) 20 cm (4) 20 m ()
6. Which one of the following items has the shortest length?



Brush
15 cm



Stapler
8 cm



Pencil
10 cm



Scissors
14 cm

- (1) Brush (2) Pencil
(3) Scissors (4) Stapler ()

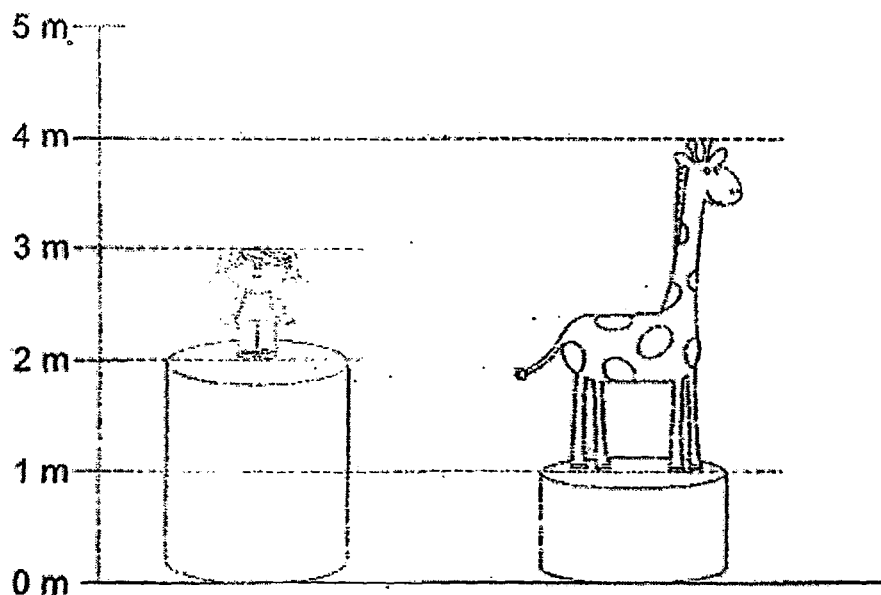
7. Wei Hao spent \$10 each day.
How much money did he spend in 4 days?

(1) \$6 (2) \$14
(3) \$20 (4) \$40 ()

8. Amy had a ribbon that was 500 cm long.
She used 175 cm of the ribbon to tie a box.
She also used 80 cm of the ribbon to make a necklace.
What was the length of the ribbon that was left?

(1) 235 cm (2) 245 cm
(3) 415 cm (4) 475 cm ()

9. Look at the picture below.



What is the total height of the girl and the giraffee?

(1) 1 m (2) 3 m
(3) 4 m (4) 7 m ()

10. Stanley is standing at the front of the line.
Brandon is standing between Stanley and Megan.
Megan is standing in front of Dexter.
Who is the last person in the line?

(1) Stanley
(3) Dexter

(2) Megan
(4) Brandon ()


Section B

Questions 11 to 19 carry 2 marks each.

Show your working clearly in the space provided for each question and write your answer in the blank provided.

(Total: 18 marks)

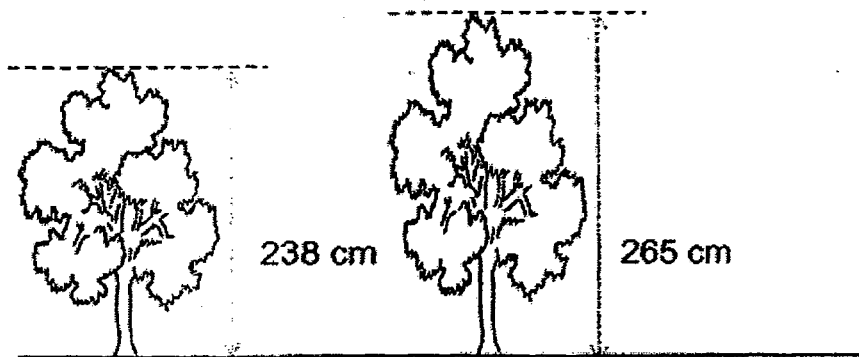
11. Look at the picture given below.



Write 1 multiplication equation and 1 division equation based on the picture given.




12. What is the total height of the 2 trees below?



Ans: _____ cm

13. Measure the length of the pencil below and write its length in the blank provided.



Ans: _____ cm

14. Celine packed a total of 40 cookies.
She packed 5 cookies equally into each bag.
How many bags of cookies did she pack?

Ans: _____

15. Tower A is 64 m high.
The total height of Tower A and Tower B is 112 m.
What is the difference between the height of the two towers?

Ans: _____ m

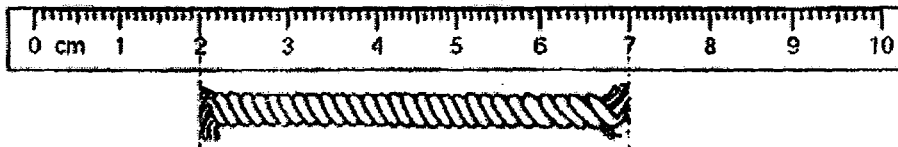
16. Look at the number pattern below.

27	12	18	21
9	4	6	?

What is the missing number?

Ans: _____

17. Study the picture below.



Eunice bought 5 pieces of rope as shown in the picture.
What was the total length of the ropes that she had bought?

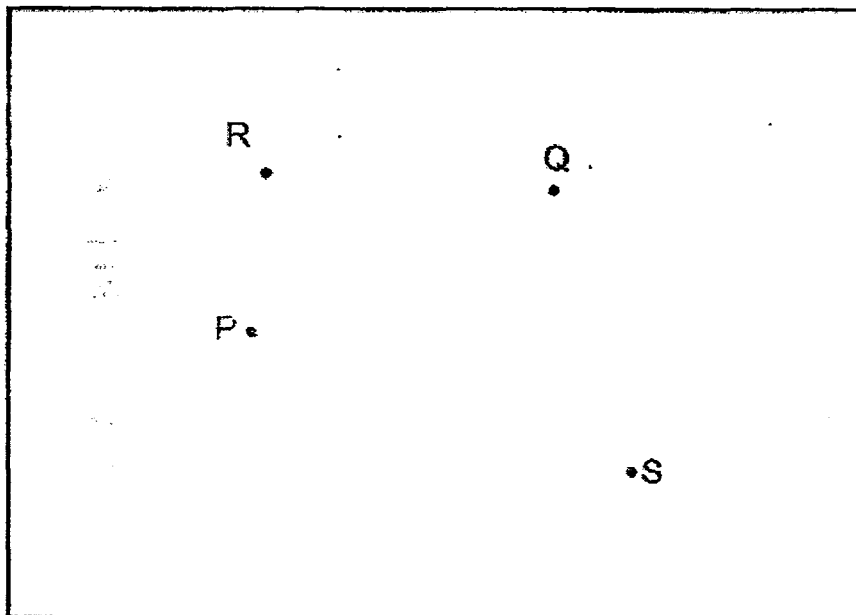
Ans: _____ cm

18. In Nanyang Primary school, you can exchange 3 Good Conduct Slips for 2 erasers.
Dahlia has earned 12 Good Conduct Slips.
How many erasers can she exchange with all her slips?
Use the table below to find the answer.

Number of Good Conduct Slips				
Number of erasers				

Ans: _____

19. In the box below, join 2 dots that form a straight line with the length of 6 cm.



Section C

Questions 20 to 22 carry 4 marks each.

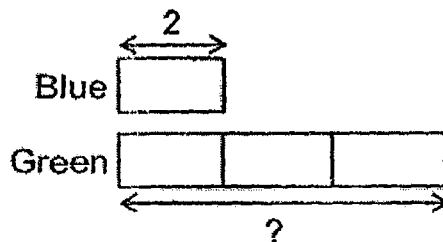
Do these word problems carefully.

Show your working clearly in the space provided for each question.

(Total: 12 marks)

20. There are blue and green marbles in each packet.
Each packet has 2 blue marbles.
The number of green marbles in each packet is 3 times as many as the number of blue marbles.

- a) How many green marbles are there in each packet?

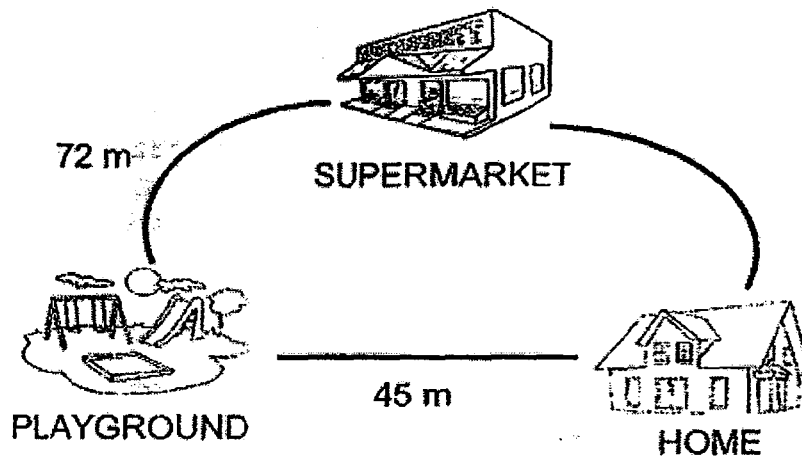


There are _____ green marbles in each packet.

- b) There are 10 such packets of marbles.
How many blue marbles are there altogether?

There are _____ blue marbles altogether.

21. Winston walked from his home to the playground.
He then walked to the supermarket to buy milk.



- a) How far did Winston walk from his home to the supermarket?

Winston walked _____ m from his home to the supermarket.

- b) Winston then walked back home using the same route.
How far did Winston walk in total?

Winston walked _____ m in total.

22. Mother bought 12 blue stickers and 20 yellow stickers.

(a) How many stickers did Mother buy in all?

Mother bought _____ stickers in all.

(b) She put all the yellow stickers equally into 4 boxes.
How many yellow stickers were there in each box?

There were _____ yellow stickers in each box.

EXAM PAPER 2016

SCHOOL : NANYANG PRIMARY SCHOOL (PRIMARY)
SUBJECT : PRIMARY 2 MATHEMATICS
TERM : TERM 2 COMBINED TOPICAL TEST SAI

BOOKLET A

Q1	Q2	Q3	Q4	Q5
4	3	3	2	2
Q6	Q7	Q8	Q9	Q10
4	4	2	3	3

Q11 $3 \times 5 = 15$, $15 \div 3 = 5$

Q12 503CM

Q13 4CM

Q14 8

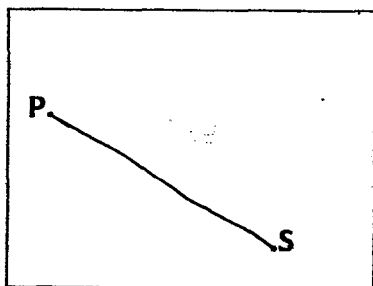
Q15 16m

Q16 7

Q17 25cm

Q18 8

Q19



Q20(a) 6, (b) 20

Q21(a) 117 (b) 234

Q22 (a) 32 (b) 5

